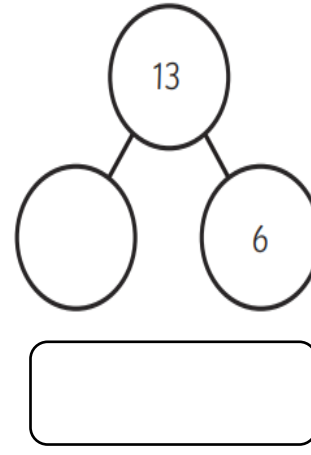
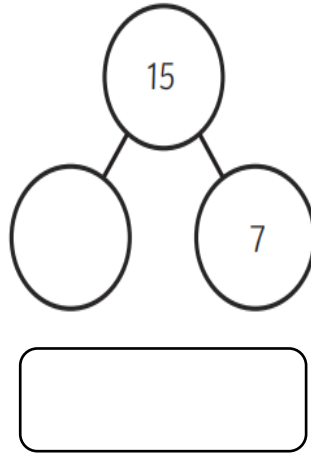
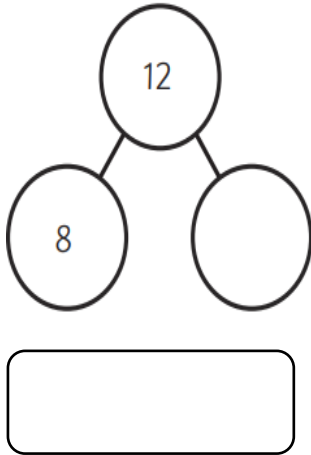


Year 1 Arithmetic Homework

Complete the part- whole models. Can you write a subtraction number sentence to match?



Ned the horse has these carrots.



a) Ned eats 1 carrot.

How many carrots does Ned have left?

Complete the sentences.

$$8 - \square = \square$$

Ned has \square carrots left.

Write a number statement for the picture.



$$\square + \square = \square$$

What comes next?

14 , 13 , 12 , \square ,
 \square , \square

Arrange the numbers and signs so that they are true.

+
 4 6
 2 =