


## Year 1 Arithmetic Homework

Now that the children are in the zoo, they can visit the animals! The first animals they see are penguins.

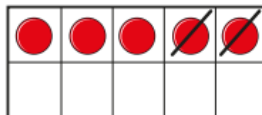


3. How many penguins are in the enclosure?

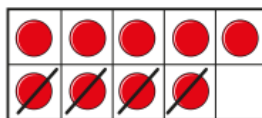
3a. If one more penguin was put in to the enclosure, how many penguins would there be?

3b. If one penguin was taken out of the enclosure, how many penguins would there be?

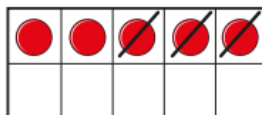
Match the counters to the number sentences.



$9 - 4 = 5$

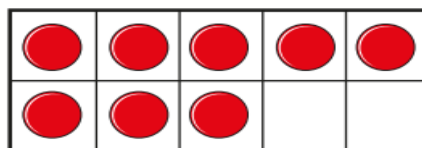


$5 - 3 = 2$

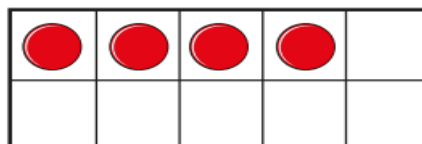


$5 - 2 = 3$

Cross out the counters to show the subtraction.



$8 - 2 = 6$



$4 - 4 = 0$