


Year 1 Arithmetic Homework

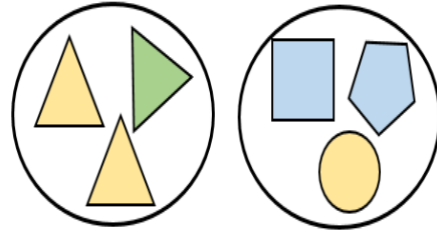
Section 1

How many wheels are there altogether?




Section 2

How have the shapes been sorted?



Section 3



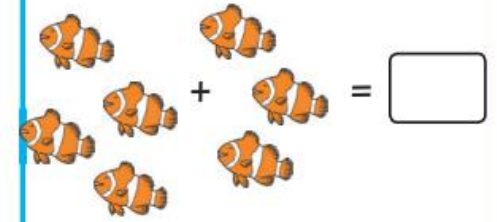
First there were ___ apples.

Then ___ apples were eaten.

Now there are ___ apples.

Section 4

Write a number sentence to show this:



Section 5



How many toys would there be altogether?

Section 6



Subtract 4 from this number.

What number will it be now?

Section 7

Draw a flower shorter than this one.



Section 8

Tick the coins that add up to 8p.

