

Autumn 2 wk 2: Friday 14nd November

Year 1 Arithmetic Homework

Section 1

10	
6	

3.

10	
3	

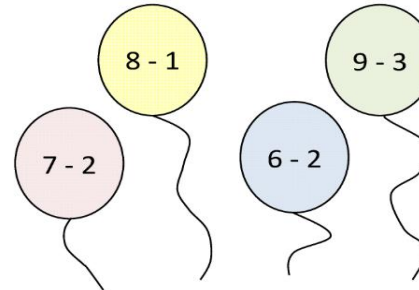
Section 2

$12 + 3 = \square$

$15 + 4 = \square$


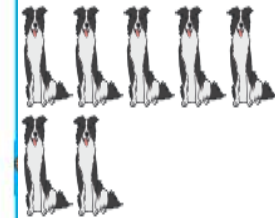
$13 + 6 = \square$

Section 3



Section 4


Tick the representations that show 8.




Section 5

Write the numbers in the correct circle.

1 5 8 9 14 2 15



odd



even

Draw a line to match each of the 3D shapes to its name.



cube

cylinder

cuboid


pyramid

Section 7



Colour the shirt with the correct answer.

$10 + 2$



$10 + 3$

