

Autumn 2 wk 1: Friday 7th November

Year 1 Arithmetic Homework

Section 1

Count the conkers.


Add one more.

How many conkers are there altogether?




Section 2

Colour half of the shape.

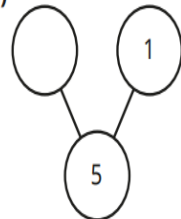


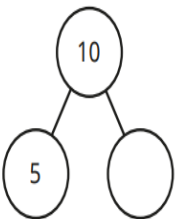
Section 3



Section 4

Complete the part-whole models and number sentences.

a)  $5 = \square + 1$

b)  $10 = 5 + \square$

Section 5

There are 5 birds on a bird table.

2 more join them.

1 flies away.

How many birds are on the bird table now?



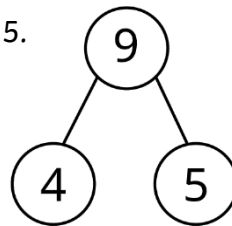
Section 6

True or False?

4 is a part

9 is a part

The whole is 5.



Section 7

How many objects in the picture?



Section 8

Draw 3 triangles and count all the sides.