

1 more than _____ is 35

1 less than _____ is 27

$15 + 3 =$

1 more than _____ is 67

1 less than _____ is 58

$25 + 3 =$

$25 + 3 =$

1 Write these days of the week in order.

Thursday

Saturday

Friday

Sunday

2 Write these months of the year in order.



July

May


June

April

Draw the counters in the correct group to match the statement below.



Half of 8 is 4.



6. Here are half of Shazia's earrings.



How many earrings does she own? Explain how you know.