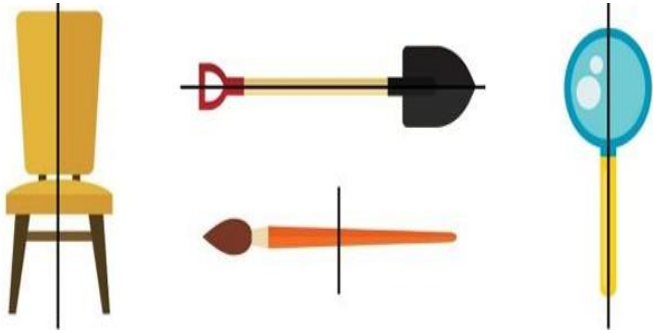
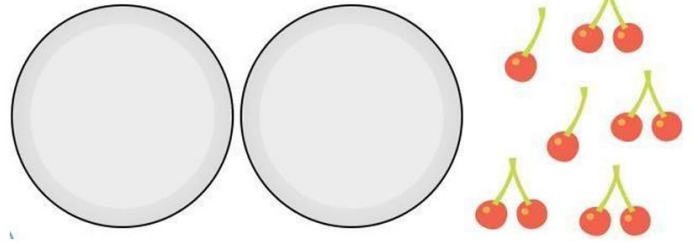



True or false: all of the objects below have been cut in half.



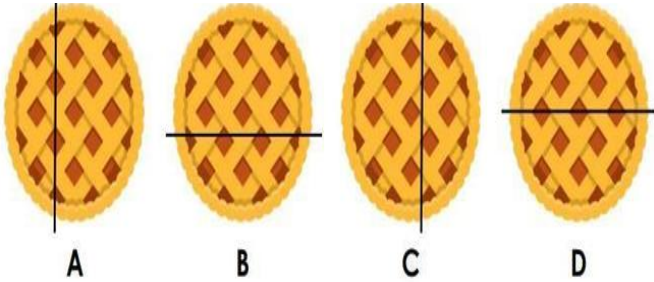
Draw half of the cherries in each plate



Tick the coins which add to 7p.

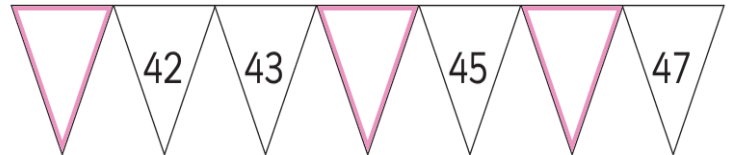
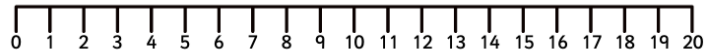


Tom and Jenny split a pie in half.





$$12 + \boxed{} = 20$$

Which pie belongs to them? Tell me why.



Group the cookies in twos.
How many groups are there?

$$20 - \boxed{} = 7$$



Draw more counters to show 4 equal groups of 3.

There are columns.

There are rows.

There are in total.

