

Friday 5th June 2026

Year 1 Arithmetic Homework

Summer 2 week 1

A quarter is 6



What is the whole?

The whole is

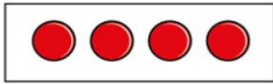
Ron and Kim have some counters.

Ron has half of the counters and Kim has half of the counters.

Draw Kim's counters.



Ron



Kim



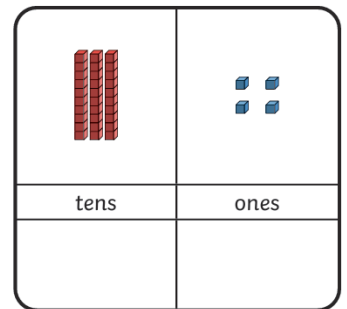
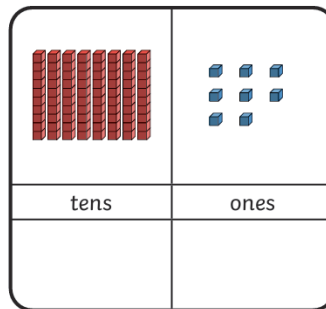
How many counters are there altogether?

Here are a quarter of the apples from a fruit bowl.

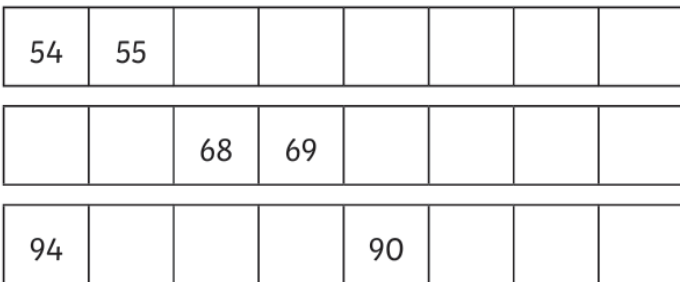


How many apples are there in the bowl altogether?

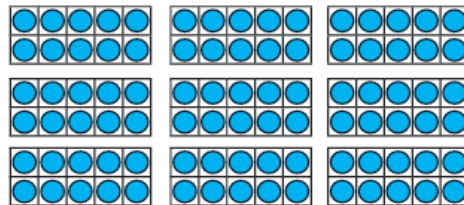
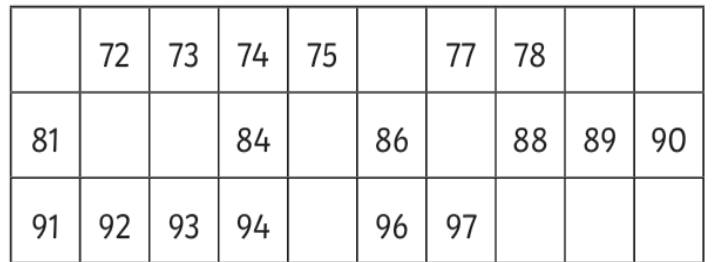
apples



Complete the number tracks.



Find the numbers missing from the number grid.



The number is .

It has tens.

Challenge:

Here are some shapes.



Complete the sentence.

The _____ is to the _____ of the _____

How many different ways can you complete the sentence?
