

Count forwards in 10s:

25				
----	--	--	--	--

Count forwards in 10s:


16				
----	--	--	--	--

Circle all even numbers.

11 9 21 20
 34 20 17
 22 14

Sara and Sam are measuring their pencils?

Sara's pencil is ___ cm long.



Sam's pencil is ___ cm long.

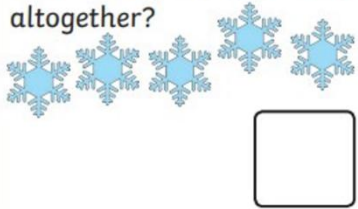


Dan had 15 cupcakes. Jon ate 5. How many cupcakes does Dan have left?



Draw 3 more snowflakes.

How many do you have altogether?



What is the missing number?

11, 12, 13, 14, ?, 16, 17.


Answer the equations below. Try to add by counting on in your head.

$7 + 2 =$ $18 + 2 =$

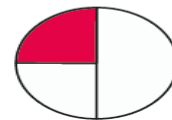

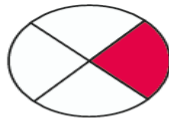
$10 + 8 =$ $2 + 11 =$

Group the butterflies in twos.

How many groups are there?



Tick the shapes that shows one quarter.



Answer the equations below. Try to add by counting on in your head.

$19 - 5 =$ $20 - 6 =$ $15 - 1 =$ $12 - 1 =$ $15 - 3 =$

$10 - 4 =$ $13 - 3 =$ $13 - 2 =$ $17 - 4 =$ $9 - 7 =$

$13 - 1 =$ $16 - 5 =$ $10 - 7 =$ $20 - 9 =$ $12 - 1 =$