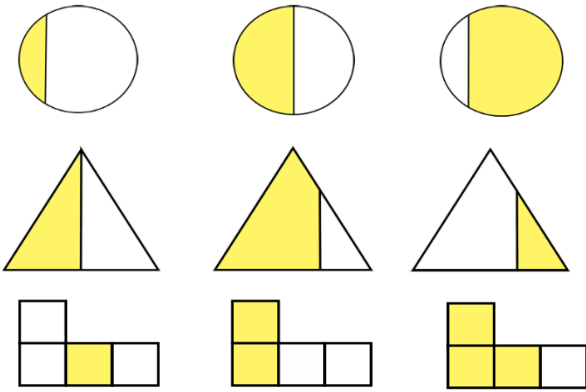


Tick the correct ones that show a half.




Write down half of the dots for each picture.

<p><math>\frac{1}{2}</math> of 6 is <input type="text"/></p>	<p><math>\frac{1}{2}</math> of 10 is <input type="text"/></p>	<p><math>\frac{1}{2}</math> of 4 is <input type="text"/></p>
<p><math>\frac{1}{2}</math> of 8 is <input type="text"/></p>	<p><math>\frac{1}{2}</math> of 2 is <input type="text"/></p>	<p><math>\frac{1}{2}</math> of 6 is <input type="text"/></p>

Write the smallest number in the first box, the largest number in the last box and any number in between.

<p><input type="text"/> <input type="text"/> <input type="text"/></p>	<p><input type="text"/> <input type="text"/> <input type="text"/></p>
<p><input type="text"/> <input type="text"/> <input type="text"/></p>	<p><input type="text"/> <input type="text"/> <input type="text"/></p>

Colour the odd numbers red and the even numbers blue (OR circle the odd numbers and tick the even).



Choose one of these symbols

<, > or =

to make the number sentences correct.


$24 + 5$    $24 + 6$

$18 + 3$    $17 + 4$



Tim had 6 marbles. He lost half of them. How many does he have left?

Emma has 47 eggs. She has some baskets to fill. She fills each basket with 10 eggs. How many baskets does she fill? How many eggs did she have left?




---



---

True or false? The crab is at the bottom of the left ladder. Explain why.

---



---



---

