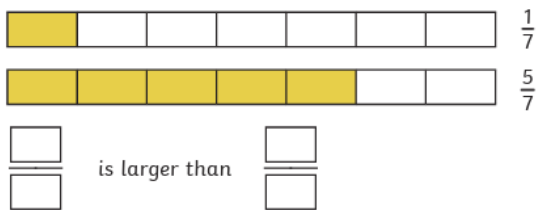
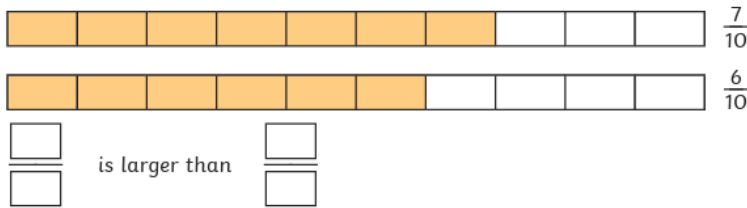


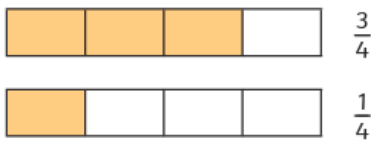


Year 3 Maths Homework

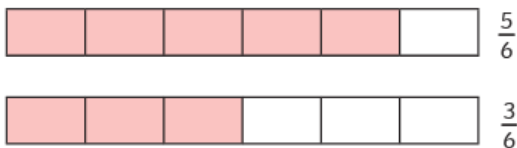


2) Use <, > or = to complete the boxes to compare each pair of fractions. Use the bar models to help you.

a) $\frac{3}{4}$ $\frac{1}{4}$



b) $\frac{5}{6}$ $\frac{3}{6}$



A. How many children preferred roast chicken crisps?

B. Which flavour crisp was the least popular?

C. How many more children preferred smoky bacon to prawn cocktail?

Crisp flavour	Number of children
ready salted	
prawn cocktail	
smoky bacon	
roast chicken	
cheese and onion	

Complete the calculations.

	3	2	6
+	6	7	3

	6	8	3
-	4	6	2

Beth buys a cupcake for £1 and 20p.



How much change would she receive if she paid with a £5 note?

How much money is shown?

