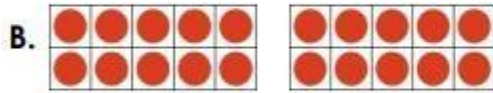



4. Match the images to the correct number sentences and then complete them.



$$5 + 5 + 5 + 5 + 5 = \square$$



$$2 + 2 + 2 + 2 + 2 = \square$$

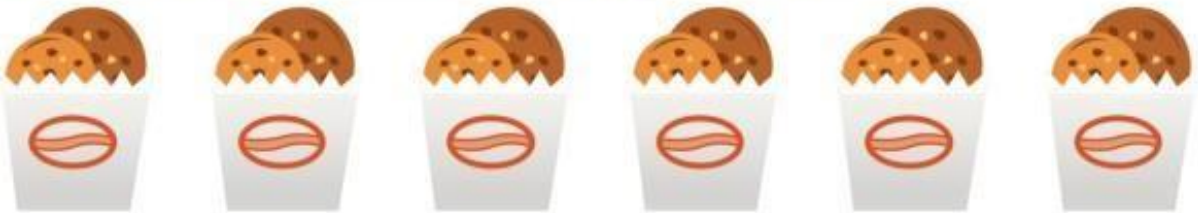


$$10 + 10 = \square$$



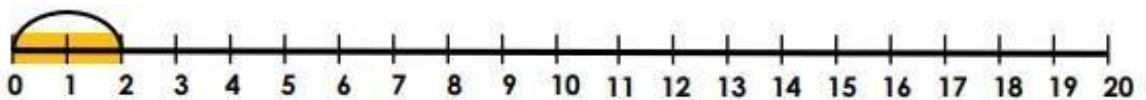
VF  
HW/Ext

5. How many biscuits are there?  
Complete the sentences and complete the number line.



There are \_\_\_\_\_ biscuits.


There are \_\_\_\_\_ groups of 2 biscuits.



6. Which is the odd one out?



B.



C.



D.  $2 + 2 + 2 = 6$

Explain your answer.