

Year 3 Maths Homework


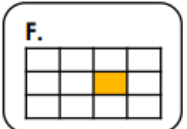
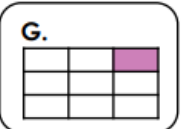
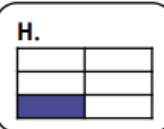
Tick the fractions that are ordered correctly.

- A. $\frac{1}{5}$ $\frac{1}{4}$ $\frac{1}{3}$ $\frac{1}{8}$ $\frac{1}{2}$
- B. $\frac{1}{8}$ $\frac{1}{6}$ $\frac{1}{5}$ $\frac{1}{4}$ $\frac{1}{3}$
- C. $\frac{1}{10}$ $\frac{1}{8}$ $\frac{1}{7}$ $\frac{1}{6}$ $\frac{1}{3}$
- D. $\frac{1}{2}$ $\frac{1}{3}$ $\frac{1}{4}$ $\frac{1}{6}$ $\frac{1}{5}$

VF

Match each fraction to its representation and order the fractions.

A. $\frac{1}{12}$ B. $\frac{1}{3}$ C. $\frac{1}{9}$ D. $\frac{1}{6}$

E.  F.  G.  H. 

> > >



17+7=

367+10=

658 + 233=

18 x 5 =

23 x 4 (use the grid id that helps) =

<https://www.timestables.co.uk/times-tables-grid/>

On TT Rockstars, please choose either you 7 x table to practise on 'JAMMING'.

