


Please use the questions as a guide. The children do not need to have the questions printed out and can complete them directly in their homework books.


Tick the statements that correctly compare the number cards.



- 7 > 16
- 16 = 7
- 16 > 7



- 14 = 2
- 14 < 2
- 14 > 2

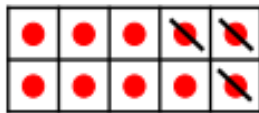


- 11 < 17
- 11 > 17
- 17 = 11



- 10 < 10
- 10 = 10
- 10 > 10

Tick the calculation that matches the ten frames and write the answer.



A. 14 - 7

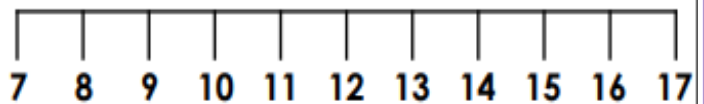
B. 14 - 9

C. 14 - 4

Write a calculation to match the statement below.

There were 17 boats at the port. 8 sailed away.

$$\square - \square = \square$$



1
2
3
4
5
6
7
8
9
10

11
12
13
14
15
16
17
18
19
20

1
2
3
4
5
6
7
8
9
10

11
12
13
14
15
16
17
18
19
20

Complete the sentences using **taller** or **shorter**.



The glass is _____ than the jug.
The jug is _____ than the glass.

Complete the sentences using **taller** or **shorter**.



The chair is _____ than the table.
The table is _____ than the chair.