


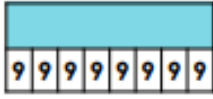

Year 3 Maths Homework



To complete this homework, you may use your 4 x table facts and double or use a multiplication chart.

- 7 x 8 = _____
- 4 x 8 = _____
- 7 x 8 = _____
- 2 x 8 = _____
- 6 x 8 = _____
- 6 x 8 = _____
- 1 x 8 = _____
- 5 x 8 = _____
- 7 x 8 = _____
- 8 x 8 = _____

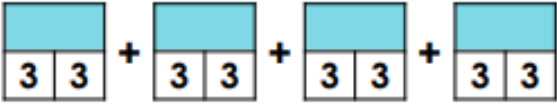
1. Use <, > or = to complete the inequality statements below.

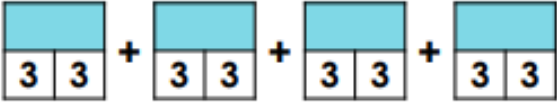
A. $8 + 8 + 8$ ○ 

B.  ○ 

C.  ○ 

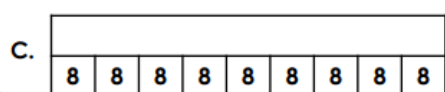

2. Tabitha thinks she can use this representation of bar models to help her find the answer to 8×6 .





Is Tabitha correct?

Match the calculations below to the correct answer.



- 1.
- 2.
- 3.

Please focus on improving speed and accuracy for 8 x tables! This will help you with our learning this week!

