

Year 3 Maths Homework

2a. Sort the pencils into groups of 3 and complete the statement.




lots of 3 =

2b. Sort the sweets into groups of 3 and complete the statement.

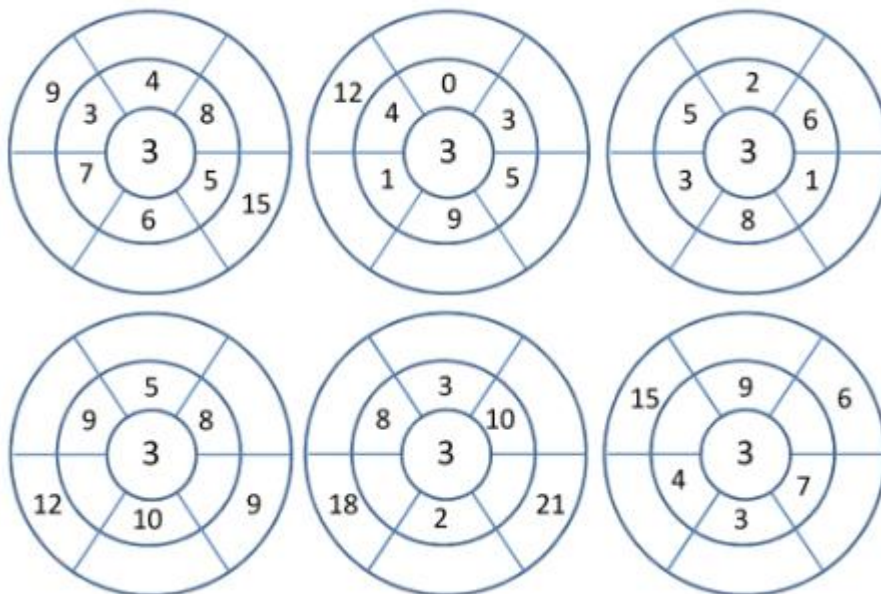



lots of 3 =

3a. Complete the bar model.



3b. Complete the bar model.



Additional challenge:

Can you create a 3 x table poster? This could be on the computer or using colouring pens/pencils

Please focus on improving speed and accuracy for 3 x tables! This will help you with our learning this week!

