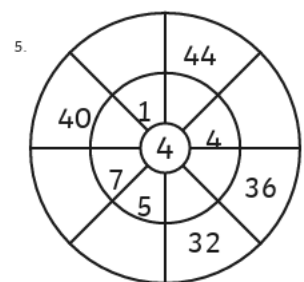
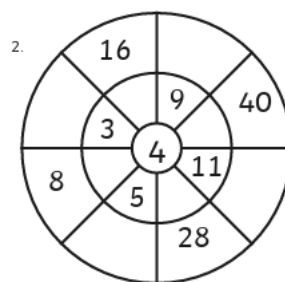
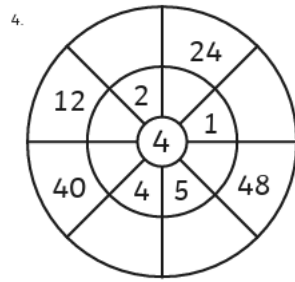
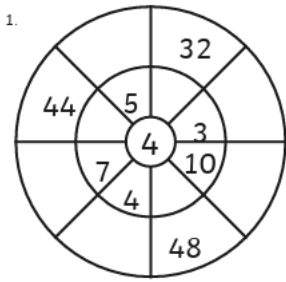


Year 3 Maths Homework



**4 Times Table Maths Mastery Mat**

Complete the fact family.

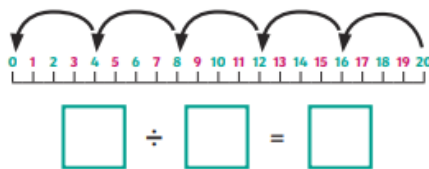
$$3 \times 4 = \square$$

$$\square \times \square = \square$$

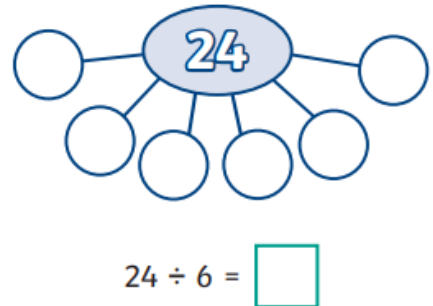
$$\square \div \square = \square$$

$$\square \div \square = \square$$

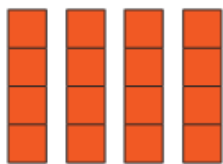
Write a division calculation to match the number line.



Complete the part-whole model.



Write a multiplication calculation to match this image.



$$\square \times \square = \square$$

Solve this problem.  
Cupcakes are sold in boxes of 4.

If you buy 12 boxes, how many cupcakes are there in total?



Match the repeated addition calculations to the matching multiplication calculations.

- |              |                             |
|--------------|-----------------------------|
| $4 \times 2$ | $4 + 4 + 4 + 4 + 4 + 4 + 4$ |
| $7 \times 4$ | $6 + 6 + 6 + 6$             |
| $6 \times 4$ | $4 + 4 + 4$                 |
| $4 \times 3$ | $4 + 4$                     |

**Additional challenge:**

Can you create a 4 x table poster? This could be on the computer or using colouring pens/pencils

Please focus on improving speed and accuracy for 4 x tables! This will help you with our learning this week!

