

Please use the questions as a guide. The children do not need to have the questions printed out and can complete them directly in their homework books.

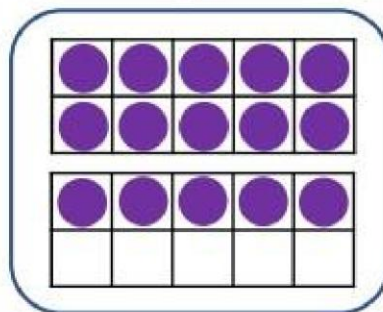
The questions each week will act as revision of the skills and methods the children have already worked on at school.

Which is the odd one out?


A



B



C



Remember to explain why it is the odd one out.

Write the numeral and draw the representation for the missing number.

| | | | | |
|--------|------------|--|--------|-------------|
| 11 | twelve | | 14 | fifteen |
|--------|------------|--|--------|-------------|

6. Lily says,




I have matched the numerals to the images.

twelve



20



14



Is she correct? Explain your answer.

Challenge:

Have a go at creating your own representation of 17.