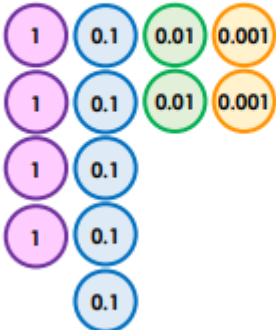



Please use the questions as a guide. The children do not need to have the questions printed out and can complete them directly in their homework books.

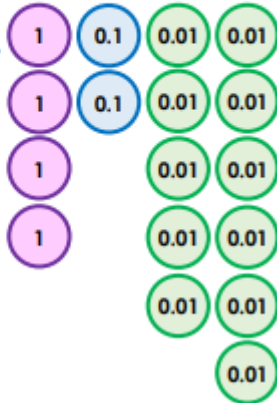
The questions each week will act as revision of the skills and methods the children have already worked on at school.

1 True or false? The numbers below have been ordered correctly from smallest to largest.

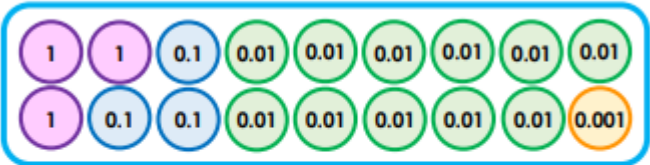
Smallest  $\longrightarrow$  Largest

A. 

B. 


C. 

2 Circle the representation in each row which has the largest number of tenths.


A. 42.178      18.308      

B. 10.559      3.059      

3 Use the digit cards to create a number that is larger than Milly's but smaller than Jamie's. Find 2 more solutions.

Milly's number is 3.015. 

5    3    1    2

Jamie's number is 3.267. 

.