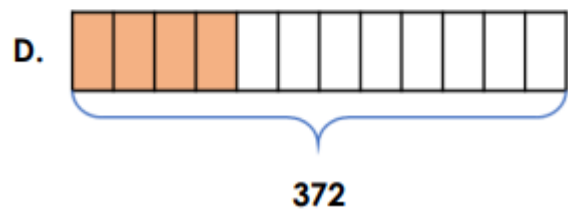
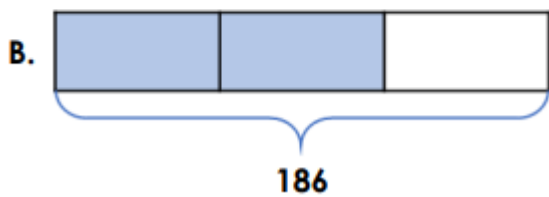
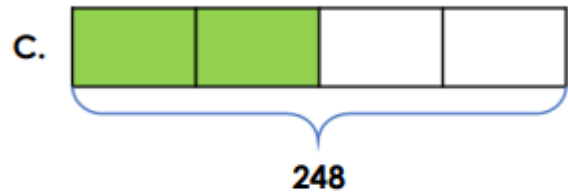
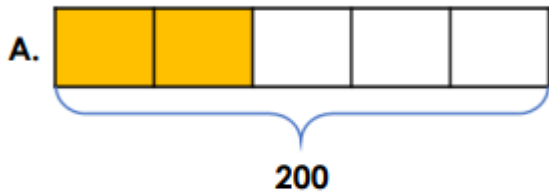


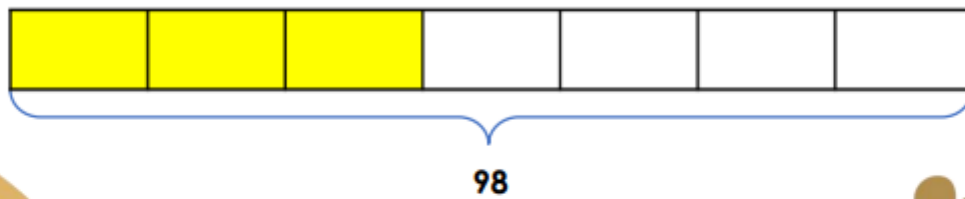
Please use the questions as a guide. The children do not need to have the questions printed out and can complete them directly in their homework books.

The questions each week will act as revision of the skills and methods the children have already worked on at school.

1 Find the odd one out.



2 Luke and Laura are finding fractions of an amount.



The answer is 24

The answer is 42



Who is correct?

3 Solve the calculations to find the path out of the maze.

The path follows answers which are double the answer that came before it.

Start
 $\frac{2}{3}$ of 9

$\frac{3}{4}$ of 42	$\frac{1}{5}$ of 240	$\frac{3}{12}$ of 384	$\frac{3}{9}$ of 576
$\frac{1}{3}$ of 36	$\frac{2}{6}$ of 72	$\frac{5}{9}$ of 360	$\frac{3}{7}$ of 357
$\frac{5}{6}$ of 60	$\frac{2}{7}$ of 210	$\frac{4}{5}$ of 455	$\frac{7}{8}$ of 568