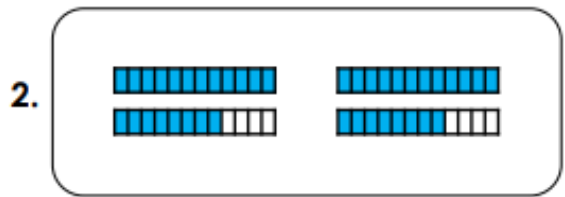
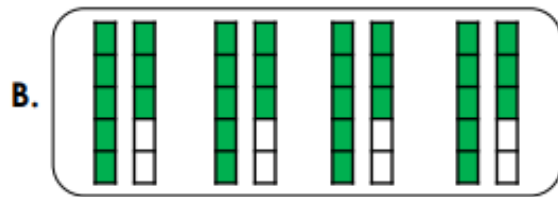
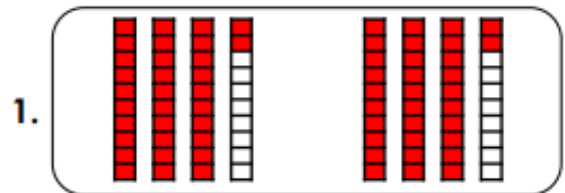


Please use the questions as a guide. The children do not need to have the questions printed out and can complete them directly in their homework books.

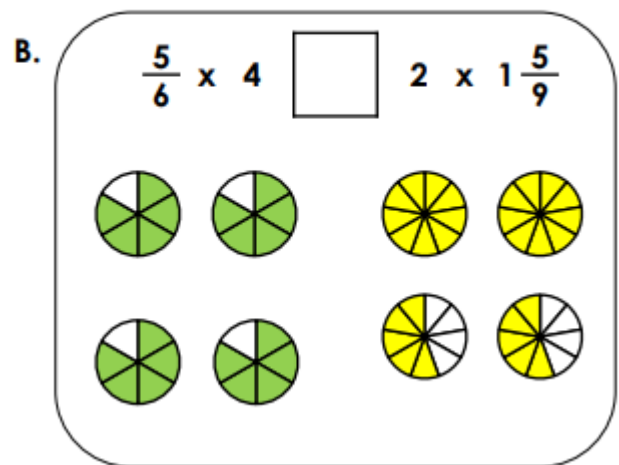
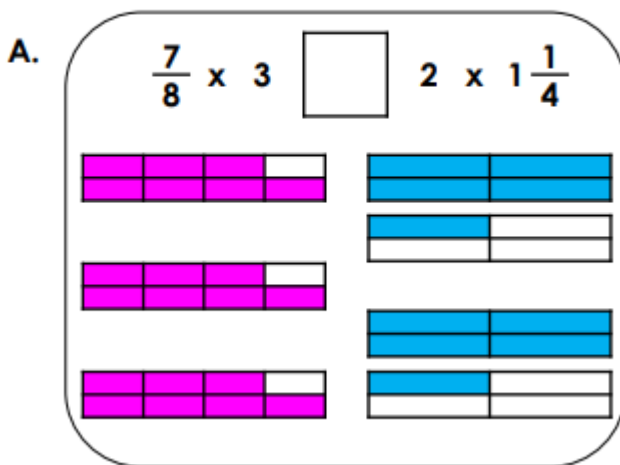
The questions each week will act as revision of the skills and methods the children have already worked on at school.

1 Match the images that have the same answer.



Write the answers to the calculations.

2 Insert <, > or = to complete the number sentences.



3 Sarah is choosing between 2 packets of fairy cakes for a class treat.

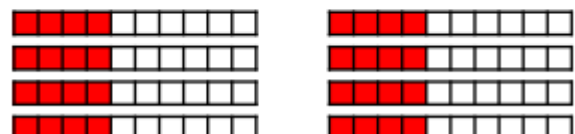


I need to pick the largest amount so that there is enough for everyone in my class.

A. $2 \times 1\frac{4}{5}$



B. $\frac{4}{10} \times 8$



Which option should Sarah choose? Convince me.