


Recognise tens and ones

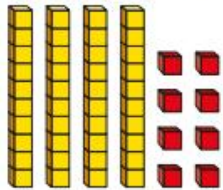
- 1 Complete the sentences to describe the counters.



There are tens and ones.

The number is

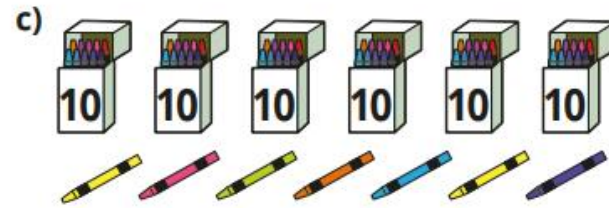
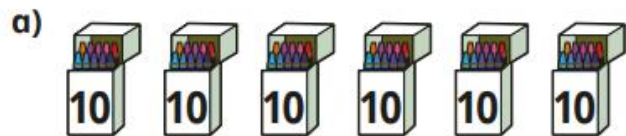
- 2 Complete the sentences to describe the base 10




There are tens and ones.

The number is

- 3 How many crayons are there?

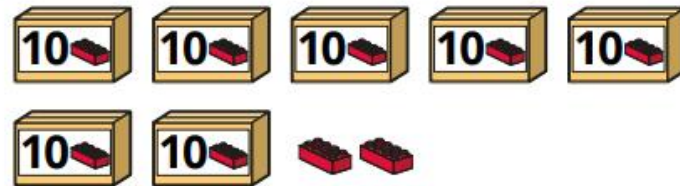


- 4 How many candles are there?



How did you count them?

- 5 How many bricks are there?



- 6 How many balloons are there?

