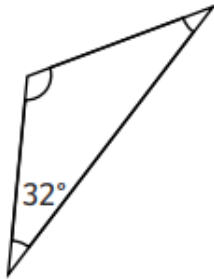


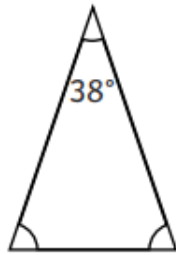
**1**

Calculate the missing angles in these Isosceles triangles.

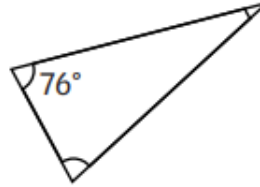
**a)**



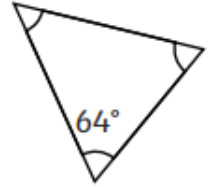
**b)**



**c)**



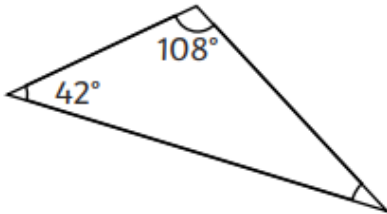
**d)**



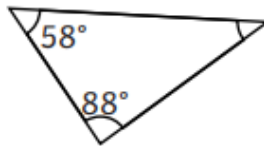
**2**

Calculate the missing angles in these scalene triangles.

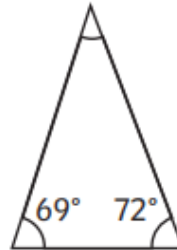
**a)**



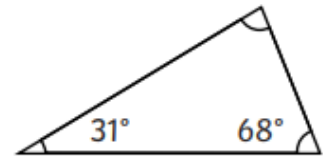
**b)**



**c)**



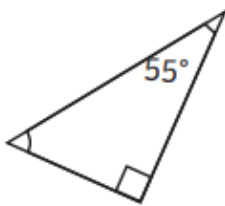
**d)**



**3**

Calculate the missing angles in these right-angled triangles.

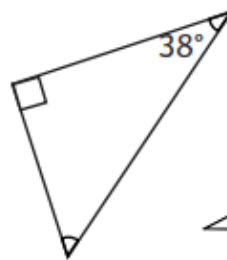
**a)**



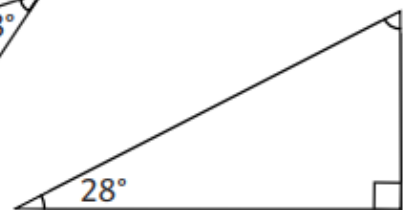
**b)**



**c)**



**d)**



**Now have a go at making up your own triangle question:**