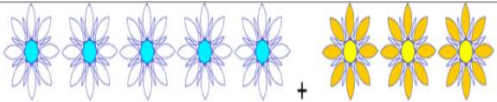


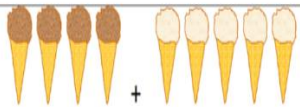
## Year 1 Arithmetic Homework

### Section 1

Complete the number sentences.



$$\underline{\quad} + \underline{\quad} = \underline{\quad}$$



$$\underline{\quad} + \underline{\quad} = \underline{\quad}$$



$$\underline{\quad} + \underline{\quad} = \underline{\quad}$$

### Section 3

Draw counters in group A to make:

- group B the smallest
- group C the greatest.



A



B



C

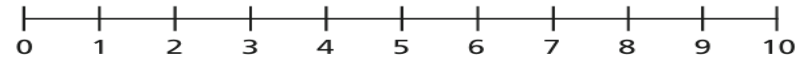
### Section 4

Draw a red circle with a green square inside.

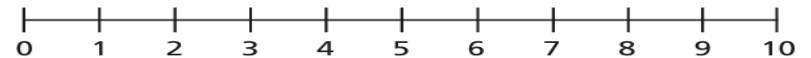
Draw a blue rectangle inside a yellow square.

### Section 6

a) How many jumps are there from one to five?

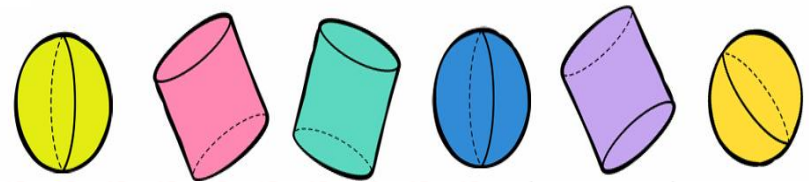


b) How many jumps are there from 8 to 2?



### Section 7

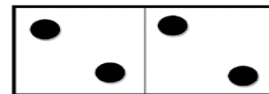
Circle the spheres. Tick (✓) the cylinders.



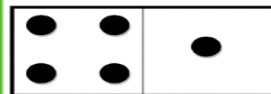
### Section 5



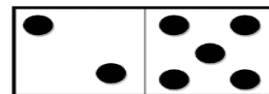
How many spots? \_\_\_\_\_



How many spots? \_\_\_\_\_



How many spots? \_\_\_\_\_



How many spots? \_\_\_\_\_

### Section 8

Count back. Fill in the missing numbers.

