


Autumn 1 wk 5: Friday 10th October

Year 1 Arithmetic Homework

Section 1

Colour the balloons that add up to 10.



Section 3

Tick the ladybird with the most spots.

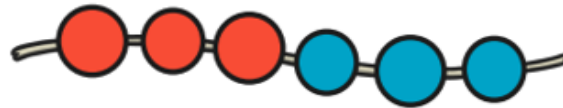


Section 6

Draw the correct number of chocolate chips on the biscuit.



Section 4



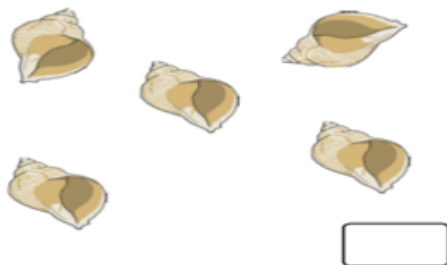
$$6 = \square + \square$$

Section 7

Write the digits as well as the words in each box.

	6	
	5	
		ten

Take 2 away.
How many are left?



Section 5

Write the 2 missing numbers on the flags.



Section 8

Complete the sentences.

	1 less than 8 = <input type="text"/>
	1 less than 5 = <input type="text"/>
	1 less than 7 = <input type="text"/>