


Year 1 Arithmetic Homework

Section 1

Colour the triangles in red and the squares in blue.



Section 3

Match each number statement to the correct answer.

$9 - 8$

10

$12 + 2$

1

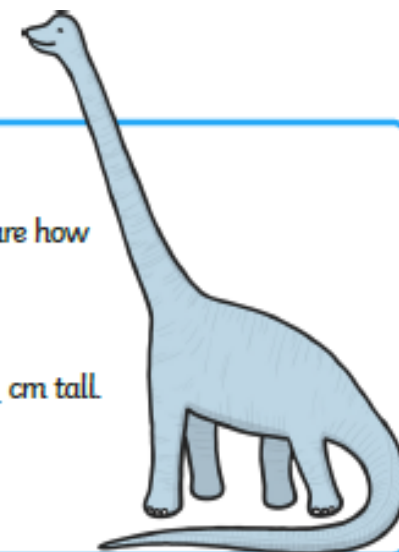
$11 - 1$

14

Section 6

Use a ruler to measure how tall the dinosaur is.

The dinosaur is ___ cm tall.



Section 4

Spencer has 12 football cards.

He loses 1. How many does he have left?



Section 7

Write an addition statement for the picture.



$\square + \square = \square$

Section 2

| | | | | | |
|---|---|---|---|---|---|
| 1 | 2 | 3 | 4 | 5 | 6 |
|---|---|---|---|---|---|

$3 + 0 = \square$


$5 - 2 = \square$

Section 5

Circle the tallest ladder.

The tallest ladder is ___.

The shortest ladder is ___.



Section 8

Fill in the missing numbers.

