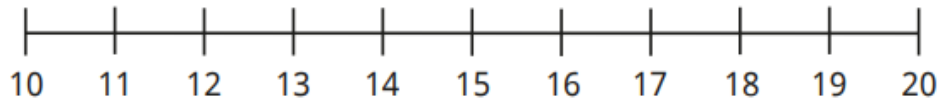


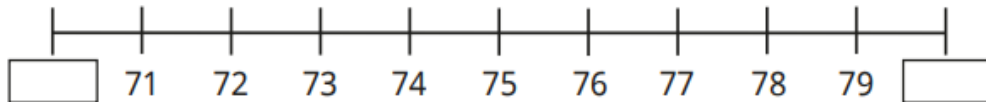
# Rounding to the nearest 10

- Use the number lines to help you complete the sentences.



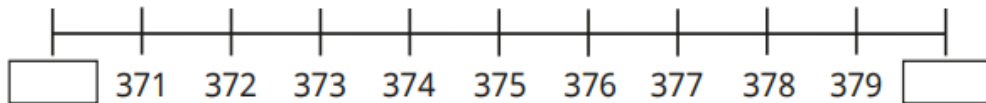
13 is closer to \_\_\_\_\_ than \_\_\_\_\_

13 rounded to the nearest 10 is \_\_\_\_\_



78 is closer to \_\_\_\_\_ than \_\_\_\_\_

78 rounded to the nearest 10 is \_\_\_\_\_

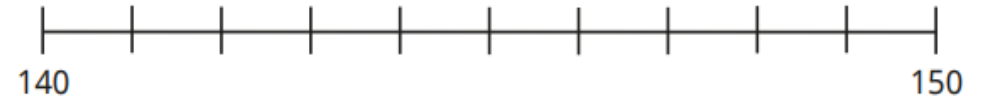


378 is closer to \_\_\_\_\_ than \_\_\_\_\_

378 rounded to the nearest 10 is \_\_\_\_\_

375 rounded to the nearest 10 is \_\_\_\_\_

- Use the number line to help you complete the sentences.



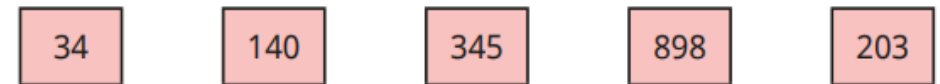
143 rounded to the nearest 10 is \_\_\_\_\_

146 rounded to the nearest 10 is \_\_\_\_\_

145 rounded to the nearest 10 is \_\_\_\_\_

150 rounded to the nearest 10 is \_\_\_\_\_

- Round each number to the nearest 10



- Which numbers round to 760 to the nearest 10?

**761      765      760      763      755**

- Round each number to the nearest 10

