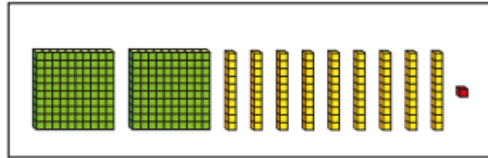
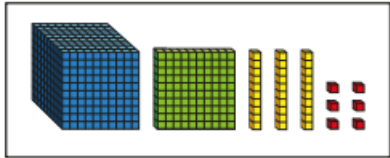


Compare numbers to 10,000

Which is the greater number? How do you know?

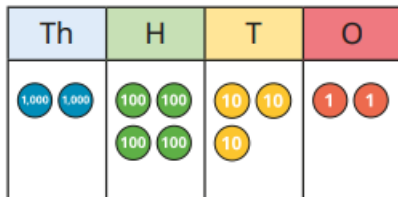


Complete the sentences.

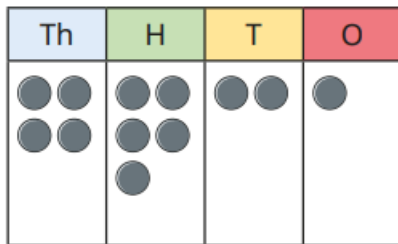
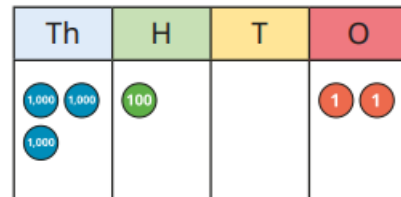
_____ is less than _____

_____ is greater than _____

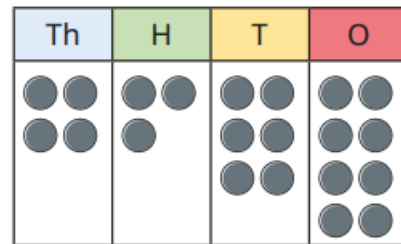
Write $<$, $>$ or $=$ to compare the numbers.



○



○



A laptop costs £2,453

A TV costs £2,435

Which item is more expensive?



Complete the statements.

Th	H	T	O
8	0	3	4
8	0	2	9

8,034 is _____ than 8,029

8,029 ○ 8,034

Write $<$, $>$ or $=$ to compare the numbers.

321 g ○ 3,012 g

7,000 m ○ 4,629 m

98 ○ 1,032

£5,612 ○ £5,628

3,402 ○ 1,897

4,002 ○ 865

4,283 ○ 4,238

1,902 ○ 1,920