


# Find 1, 10, 100, 1000 more or less

Complete the sentences.



The number is \_\_\_\_\_

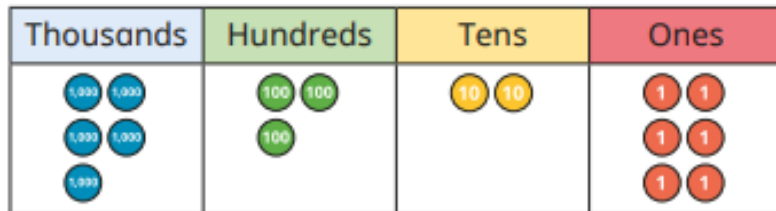
1 less than the number is \_\_\_\_\_

10 less than the number is \_\_\_\_\_

100 less than the number is \_\_\_\_\_

1,000 less than the number is \_\_\_\_\_

Complete the sentences.



The number is \_\_\_\_\_

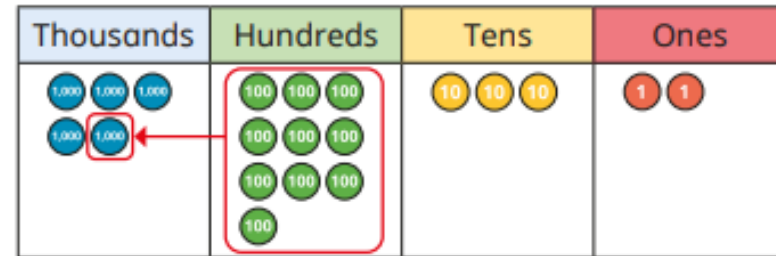
1 more than the number is \_\_\_\_\_

10 more than the number is \_\_\_\_\_

100 more than the number is \_\_\_\_\_

1,000 more than the number is \_\_\_\_\_

The place value chart shows that 100 more than 4,932 is 5,032



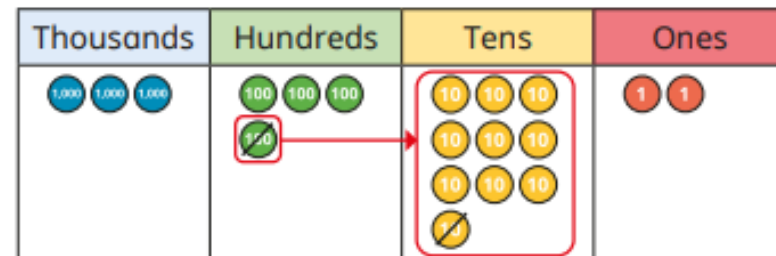
Use this method to find the values.

100 more than 3,904

10 more than 1,993

1 more than 8,999

The place value chart shows that 10 less than 3,402 is 3,392



Use this method to find the values.

100 less than 2,034

10 less than 1,903