




# Represent numbers to 1000

How many candles are there?

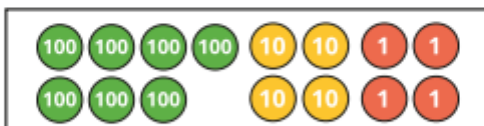

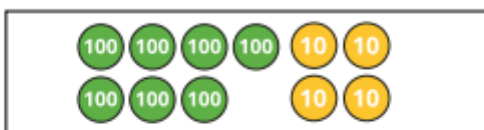


Write your answer in numerals and words.

What numbers are represented?




What numbers are represented?



Whitney and Dexter have each made a number.



Whitney



Dexter



What numbers have they made?

What is the same about

their numbers?

What is different?



Annie is drawing place value counters to represent 516

Complete her drawing.

