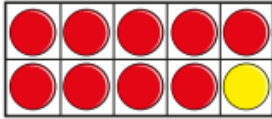



Make a whole with tenths

Aisha uses a ten frame and counters to show the addition $0.9 + 0.1 = 1$



Use a ten frame and counters to find different ways to make 1 whole.

The hundred square represents 1 whole.



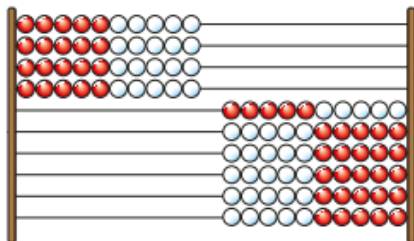
How many tenths are shaded?

How many more tenths need to be shaded so that the whole hundred square is shaded?

_____ tenths + _____ tenths = 1 whole

Here is a Rekenrek with 100 beads.

Each row of beads is equal to one tenth of the whole.

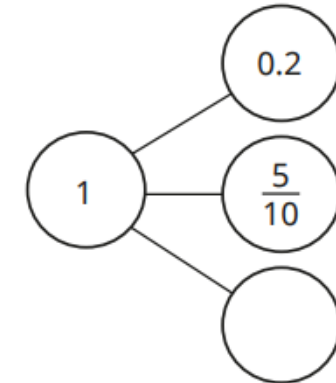
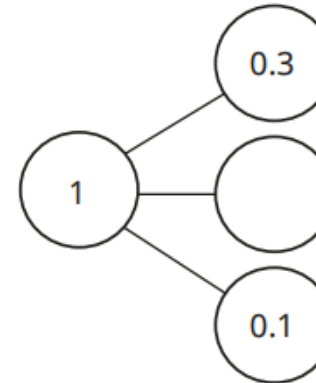
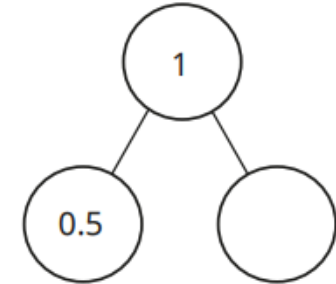
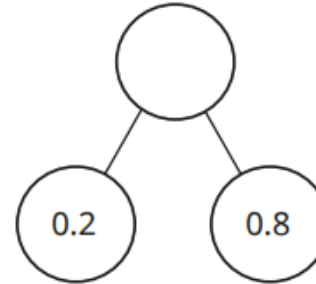


_____ tenths are on the left.

_____ tenths are on the right.

_____ + _____ = 1 whole

Complete the part-whole models.



Complete the number sentences.

► $0.1 + \underline{\quad} = 1$

► $1 = 0.2 + \underline{\quad}$

► $0.7 + 0.3 = \underline{\quad}$

► $\underline{\quad} + 0.5 = 1$

► $\frac{2}{10} + 0.8 = \underline{\quad}$

► $1 = \frac{6}{10} + \underline{\quad}$

► $1 = \underline{\quad} + 0.5 + 0.1$

► $\frac{3}{10} + 0.4 + \underline{\quad} = 1$