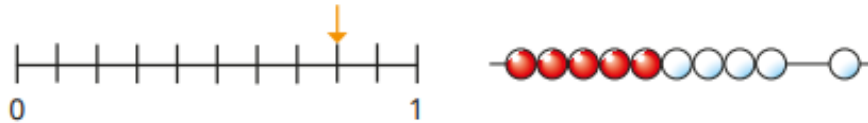
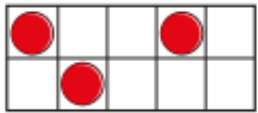
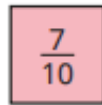

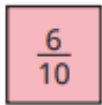
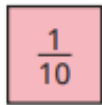


Tenths as fractions

What fraction does each picture show?



Draw pictures to show the fractions.



Compare drawings with a partner.

Scott is counting up in tenths.



Continue Scott's counting until you reach 1

With a partner, count back from 1 to 0 in tenths.

What fractions are shown?

a)



b)



c)




d)



Complete the number tracks.

a)



b)



c)

