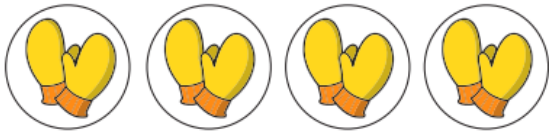


1 Complete the sentences.


a)



There are pairs with mittens
in each pair.

There are mittens altogether.

b)



There are groups with
counters in each group.

There are counters altogether.

2 Which group is **not** equal to the others?



3 Complete the equal groups.

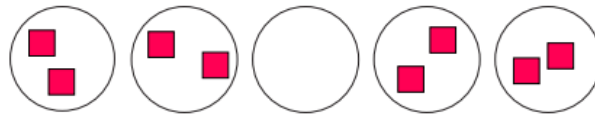
Complete the sentence for each set.

There are groups with in each group.

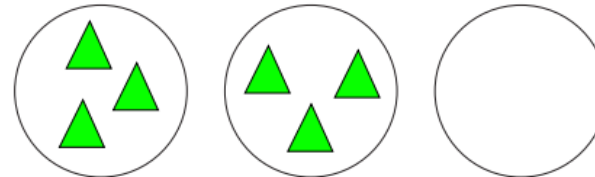
a)



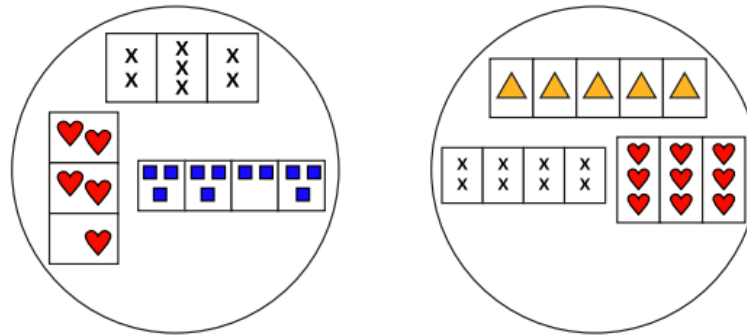
b)



c)



4 a) How has Ann sorted these groups?

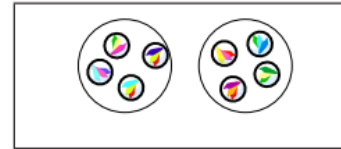


b) Where does this group belong?



5 Match the sentences to the pictures.

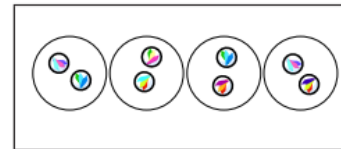
There are 3 equal groups with 5 in each group.




There are 4 equal groups with 2 in each group.



There are 2 equal groups with 4 in each group.



6



Is Tiny correct?
Talk to a partner.



I can see 5
equal groups of 2

